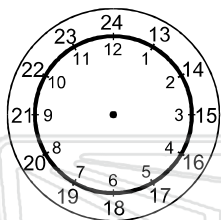


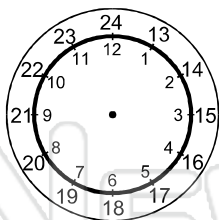


Name _____ Class _____ Date _____

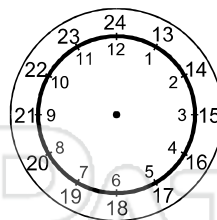
● Draw the times on the 24 hour clock faces.



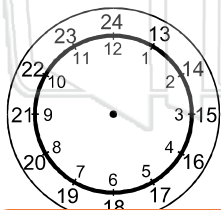
▶ 0500



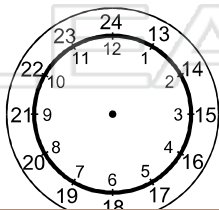
▶ 1920




▶ 1050



▶ 1715



▶ 2010

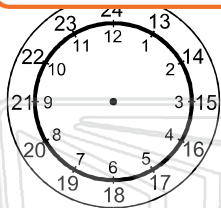


▶ 0345

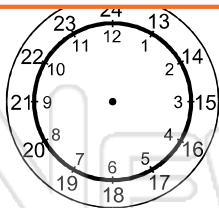


PREVIEW

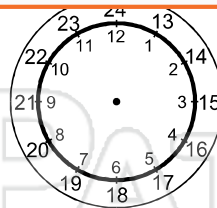
Please [Sign In](#) or [Sign Up](#) to download the printable version of this worksheet



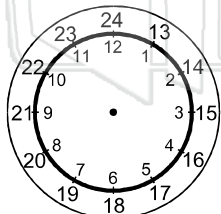
▶ 1640



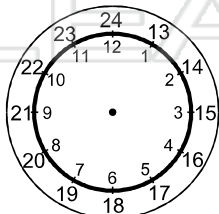
▶ 1125



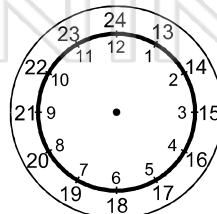
▶ 2400



▶ 0750



▶ 1655

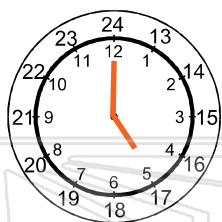


▶ 1220




Name _____ Class _____ Date _____

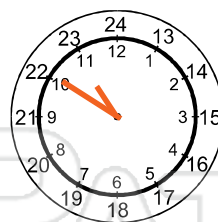
● Draw the times on the 24 hour clock faces.



▶ 0500



▶ 1920



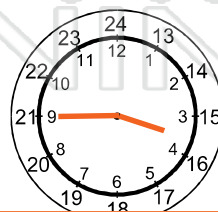
▶ 1050



▶ 1715



▶ 2010

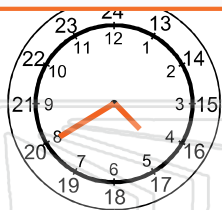


▶ 0345



PREVIEW

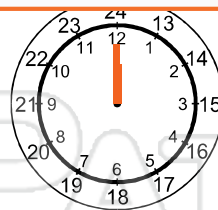
Please [Sign In](#) or [Sign Up](#) to download the printable version of this worksheet



▶ 1640




▶ 1125




▶ 2400



▶ 0750



▶ 1655



▶ 1220