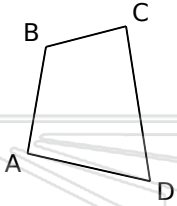




# Find the measure of the missing angle

Math

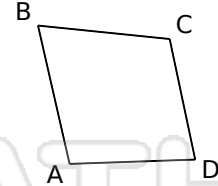
Name \_\_\_\_\_ Class \_\_\_\_\_ Date \_\_\_\_\_



$\angle BAD = \underline{\hspace{2cm}}$   $\angle BCD = 84.38^\circ$   
 $\angle ABC = 114.26^\circ$   $\angle CDA = 68.47^\circ$



$\angle BAD = 117.19^\circ$   $\angle BCD = \underline{\hspace{2cm}}$   
 $\angle ABC = 75.93^\circ$   $\angle CDA = 76.32^\circ$



$\angle BAD = \underline{\hspace{2cm}}$   $\angle BCD = 107.78^\circ$   
 $\angle ABC = 71.3^\circ$   $\angle CDA = 80.02^\circ$



$\angle BAD = \underline{\hspace{2cm}}$   
 $\angle ABC = \underline{\hspace{2cm}}$



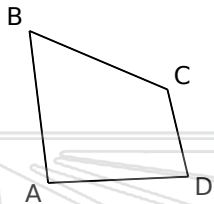
## PREVIEW

Please [Sign In](#) or [Sign Up](#) to download the printable version of this worksheet

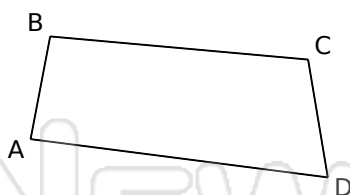
$\angle BAD = \underline{\hspace{2cm}}$   
 $\angle ABC = \underline{\hspace{2cm}}$

$3.03^\circ$   
 $7.16^\circ$

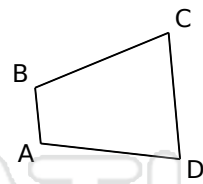
$3.19^\circ$   
 $7.14^\circ$



$\angle BAD = 94.45^\circ$   $\angle BCD = 126.37^\circ$   
 $\angle ABC = 60.01^\circ$   $\angle CDA = \underline{\hspace{2cm}}$



$\angle BAD = 86.54^\circ$   $\angle BCD = 104.64^\circ$   
 $\angle ABC = 95.67^\circ$   $\angle CDA = \underline{\hspace{2cm}}$



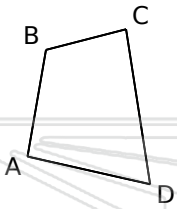
$\angle BAD = \underline{\hspace{2cm}}$   $\angle BCD = 72.76^\circ$   
 $\angle ABC = 106.64^\circ$   $\angle CDA = 78.41^\circ$



# Find the measure of the missing angle - Answer Key

Math

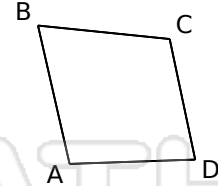
Name \_\_\_\_\_ Class \_\_\_\_\_ Date \_\_\_\_\_



$\angle BAD = 92.89^\circ$   $\angle BCD = 84.38^\circ$   
 $\angle ABC = 114.26^\circ$   $\angle CDA = 68.47^\circ$



$\angle BAD = 117.19^\circ$   $\angle BCD = 90.56^\circ$   
 $\angle ABC = 75.93^\circ$   $\angle CDA = 76.32^\circ$



$\angle BAD = 100.9^\circ$   $\angle BCD = 107.78^\circ$   
 $\angle ABC = 71.3^\circ$   $\angle CDA = 80.02^\circ$



$\angle BAD =$   
 $\angle ABC =$

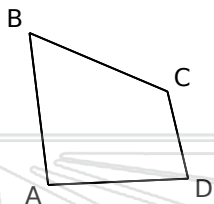
**PREVIEW**

Please [Sign In](#) or [Sign Up](#) to download the printable version of this worksheet

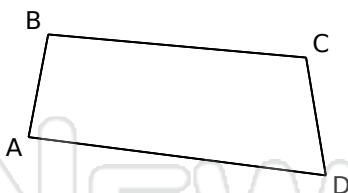
$3.03^\circ$   
 $7.16^\circ$

$\angle BAD =$   
 $\angle ABC =$

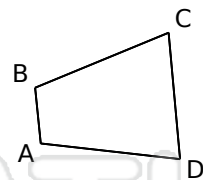
$3.19^\circ$   
 $7.14^\circ$



$\angle BAD = 94.45^\circ$   $\angle BCD = 126.37^\circ$   
 $\angle ABC = 60.01^\circ$   $\angle CDA = 79.17^\circ$



$\angle BAD = 86.54^\circ$   $\angle BCD = 104.64^\circ$   
 $\angle ABC = 95.67^\circ$   $\angle CDA = 73.15^\circ$



$\angle BAD = 102.19^\circ$   $\angle BCD = 72.76^\circ$   
 $\angle ABC = 106.64^\circ$   $\angle CDA = 78.41^\circ$