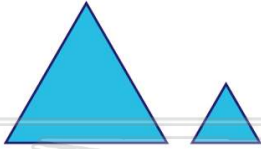




Name _____ Class _____ Date _____

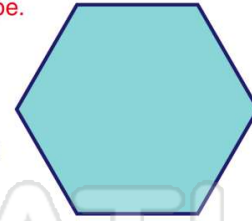
1 These figures are _____.



- A congruent
- B similar

2 Name this shape.

- A octagon
- B pentagon
- C hexagon
- D quadrilateral



3 These figures are **congruent**.

- A true
- B false



4 Which two figures are **congruent**?



5



PREVIEW

Please [Sign In](#) or [Sign Up](#) to download the printable version of this worksheet

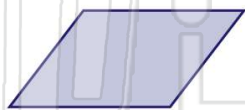
7

- A octagons
- B pentagons
- C hexagons
- D quadrilaterals



9 A(n) _____ is a **quadrilateral** with **two pairs of parallel sides**.

- A trapezoid
- B octagon
- C triangle
- D parallelogram



10 A _____ has **3 sides**.

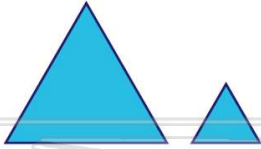
- A pentagon
- B hexagon
- C triangle
- D quadrilateral





Name _____ Class _____ Date _____

1 These figures are _____.

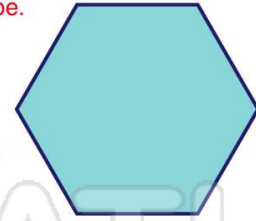


- A congruent
- B similar

(B)

2 Name this shape.

- A octagon
- B pentagon
- C hexagon
- D quadrilateral



(C)

3 These figures are **congruent**.

- A true
- B false



(A)

4 Which two figures are **congruent**?



(D)

5



(C)

PREVIEW

Please [Sign In](#) or [Sign Up](#) to download the printable version of this worksheet

7

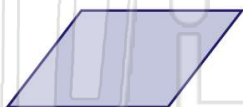
- A octagons
- B pentagons
- C hexagons
- D quadrilaterals



(A)

9 A(n) _____ is a **quadrilateral** with **two pairs of parallel sides**.

- A trapezoid
- B octagon
- C triangle
- D parallelogram



(D)

10 A _____ has **3 sides**.

- A pentagon
- B hexagon
- C triangle
- D quadrilateral



(C)