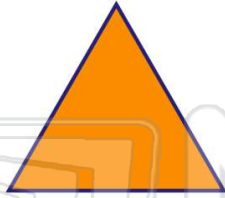




Name \_\_\_\_\_ Class \_\_\_\_\_ Date \_\_\_\_\_

1 What is the name of a **three-sided figure**?

- A hexagon
- B square
- C rhombus
- D triangle



2 What is the **name** of this figure?

- A triangle
- B rectangle
- C square
- D pentagon



3 Which one of the following is a **rectangle**?



4 What is a **four-sided figure** called?

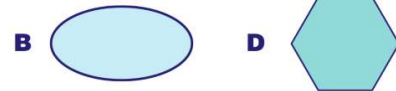
- A quadrilateral
- B pentagon
- C triangle



## PREVIEW

Please [Sign In](#) or [Sign Up](#) to download the printable version of this worksheet

7 **B false**



9 is a \_\_\_\_\_

- A quadrilateral
- B pentagon
- C triangle
- D diamond

10 An **octagon** is an **eight-sided figure**.

True or false?

- A true
- B false

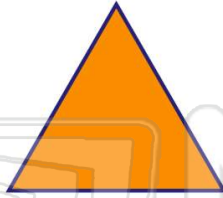




Name \_\_\_\_\_ Class \_\_\_\_\_ Date \_\_\_\_\_

1 What is the name of a **three-sided figure**?

- A hexagon
- B square
- C rhombus
- D triangle



(D)

2 What is the **name** of this figure?

- A triangle
- B rectangle
- C square
- D pentagon



(C)

3 Which one of the following is a **rectangle**?



(C)

4 What is a **four-sided figure** called?

- A quadrilateral
- B pentagon
- C triangle



(A)

5



(D)

## PREVIEW

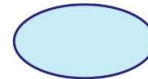
Please [Sign In](#) or [Sign Up](#) to download the printable version of this worksheet

7

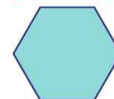
B false



B

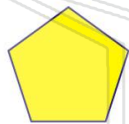


D



(C)

9



is a \_\_\_\_\_.

- A quadrilateral
- B pentagon
- C triangle
- D diamond

(B)

10

An **octagon** is an **eight-sided figure**.

True or false?

- A true
- B false



(A)