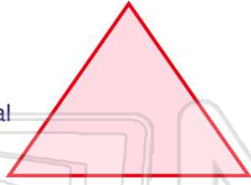




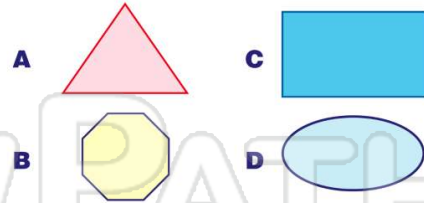
Name _____ Class _____ Date _____

1 What is the **name** of this **polygon**?

- A square
- B pentagon
- C triangle
- D quadrilateral



2 Which picture is a **triangle**?



3 What is a **five-sided figure** called?

- A triangle
- B square
- C hexagon



4 What is **name** of the following type of **quadrilateral**?

- A square
- B rhombus



5



PREVIEW

7

Please [Sign In](#) or [Sign Up](#) to download the printable version of this worksheet

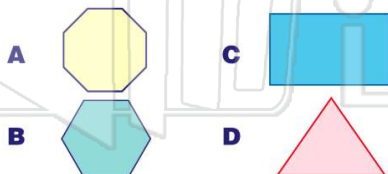
D hexagon



D triangle



9 Which one of the following is a **quadrilateral**?



10 What is the **name** of this figure?

- A triangle
- B trapezoid
- C square
- D parallelogram

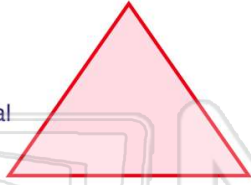




Name _____ Class _____ Date _____

1 What is the **name** of this **polygon**?

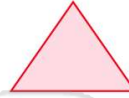
- A square
- B pentagon
- C triangle
- D quadrilateral



(C)

2 Which picture is a **triangle**?

A



C



B



D



(A)

3 What is a **five-sided figure** called?

- A triangle
- B square
- C hexagon



(D)

4 What is **name** of the following type of **quadrilateral**?

- A square
- B rhombus



(B)

5



(A)

PREVIEW

Please [Sign In](#) or [Sign Up](#) to download the printable version of this worksheet

7

(A)

D hexagon



D triangle



9 Which one of the following is a **quadrilateral**?

A



C



(C)

B



D



10 What is the **name** of this figure?

- A triangle
- B trapezoid
- C square
- D parallelogram



(B)