



Name \_\_\_\_\_ Class \_\_\_\_\_ Date \_\_\_\_\_

### Match each of the following terms to its definition:

Rhombus

Plane figure

Rectangle

Parallelogram

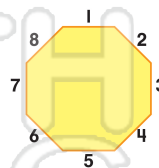
Octagon

Polygon

Pentagon

Quadrilateral

1. \_\_\_\_\_ - a polygon with 8 sides



2. \_\_\_\_\_ - a four-sided plane figure with both pairs of opposite sides parallel and congruent



3. \_\_\_\_\_



4. \_\_\_\_\_



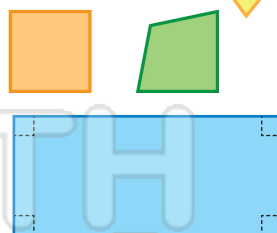
## PREVIEW

Please [Sign In](#) or [Sign Up](#) to download the printable version of this worksheet

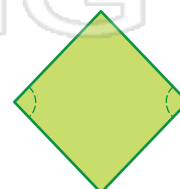
5. \_\_\_\_\_

6. \_\_\_\_\_ - a four-sided polygon

7. \_\_\_\_\_ - a quadrilateral with two pairs of congruent, parallel sides and four equal angles



8. \_\_\_\_\_ - a quadrilateral with all four sides equal in length





Name \_\_\_\_\_ Class \_\_\_\_\_ Date \_\_\_\_\_

**Match each of the following terms to its definition:**

Rhombus

Plane figure

Rectangle

Parallelogram

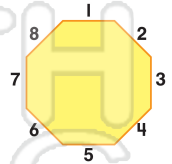
Octagon

Polygon

Pentagon

Quadrilateral

1. **octagon** - a polygon with 8 sides



2. **parallelogram** - a four-sided plane figure with both pairs of opposite sides parallel and congruent



3. per



4. pla

## PREVIEW

Please [Sign In](#) or [Sign Up](#) to download the printable version of this worksheet

5. pol

6. **quadrilateral** - a four-sided polygon

7. **rectangle** - a quadrilateral with two pairs of congruent, parallel sides and four equal angles



8. **rhombus** - a quadrilateral with all four sides equal in length

